

EMMANUEL MISSION SR SEC SCHOOL, BEAWAR
ONLINE CLASSES
WEEK – 32 (19.10.2020)
CLASS – I

English: Kindly see below

Hindi: Kindly see below

Mathematics: Kindly see below

General Science: Kindly see below

Social Studies: Kindly see below

Computer Science: Kindly see below

General Knowledge: Kindly see below

Physical Education: <https://youtu.be/I5hh8e01ZHo>

Music (Guitar): <https://youtu.be/JKO0wF7zXs4>

Music (Keyboard): <https://youtu.be/vzRRurIpuJ4>

Health & Sanitation: <https://youtu.be/b0j5SQx-puE>

Art Education: <https://youtu.be/Ky3ZL0kmAEc>

EMMANUEL MISSION SR SEC SCHOOL, BEAWAR
ENGLISH - I
CLASS – I
Chapter-7 - The Kite

A. Choose the correct answers and complete these sentences.

1. The kite always _____ its tail.

- a. wags b. moves c. breaks

Ans. (a) wags

2. It sits on the tops of _____.

- a. ponds b. houses c. grass

Ans. (b) houses

3. The kite does not move when the children pull its _____.

- a. tail b. ears c. face

Ans. (a) tail

4. The children climb up the _____.

- a. stairs b. roof c. ladder

Ans. (c) ladder

5. The kite flies away when the _____ lifts it.

- a. wind b. children c. ladder

Ans. (a) wind

A. Complete the following sentences.

1. There is a **red apple** on the tree.

2. On a hot day, I drink **cold milk**.

3. There are **tall trees** in the park.

4. Sheba has **curly hair**.

5. Ali made a **tasty sandwich** for mother.

B. Put the words in brackets in the correct places in these sentences. The pictures will help you.

1. The giraffe has legs. (long)

The giraffe has long legs.

2. Mina has a bag. (big)

Mina has a big bag.

3. The sparrow is a bird. (small)

The sparrow is a small bird.

4. The kitten has fur. (brown)

The kitten has brown fur.

5. I hear a noise. (loud)

I hear a loud noise.

A. Look at these pictures. Tick (✓) the correct words to complete these sentences.



1. Tommy wags/swings his tail happily.



2. Rita and Nisha shake/move hands.



3. Tina opens/shakes the lid and looks inside the box.



4. He is strong. He can push/lift the heavy box.



5. The leaves fall/pull in October.



6. The bird flies/runs to its nest.

B. Complete these sentences with the correct words.

glass	wood	paper	cloth	sticks
-------	------	-------	-------	--------

1. Kites are made of paper.

2. Bottles are made of glass.

3. Nests are made with sticks.

4. Chairs are made with wood.

5. Dresses are made with cloth.

Writing

Complete these sentences with words from the box.

flies	wet	breeze
-------	-----	--------

It floats in the breeze.

It gets wet in the rain.

Look! It flies far away.

B. Answer these questions.

Q.1 Why is the kite naughty?

Ans. The kite is naughty because it wags its tail and shakes its ears.

Q.2 How does the kite look?

Ans. The kite has a snow-white face and pink and white ears.

Q.3 What is the kite made of?

Ans. The kite is made up of paper and little bits of string tied together.

Q.4 What are the two things that the children do to get the kite from the roof-top?

Ans. First, the children pull the tail of the kite.

Then, the children bring a ladder.

Q.5 What happens when the wind lifts the kite?

Ans. When the wind lifts the kite, it flies away again.

POEM : Tulips

A. Tick the correct words.



1. Tulips grow in the garden/forest.



2. Tulips grow straight in a row/bunch.

Circle the word that does not sound like the other words in that line.

1. grow go toe now

2. cup up tap pup

3. one fun bone run

4. straight late date light

B. Answer this question.

Q.1 What do tulips need to grow?

Ans. Tulips need water and sunshine to grow.

EMMANUEL MISSION SR SEC SCHOOL, BEAWAR

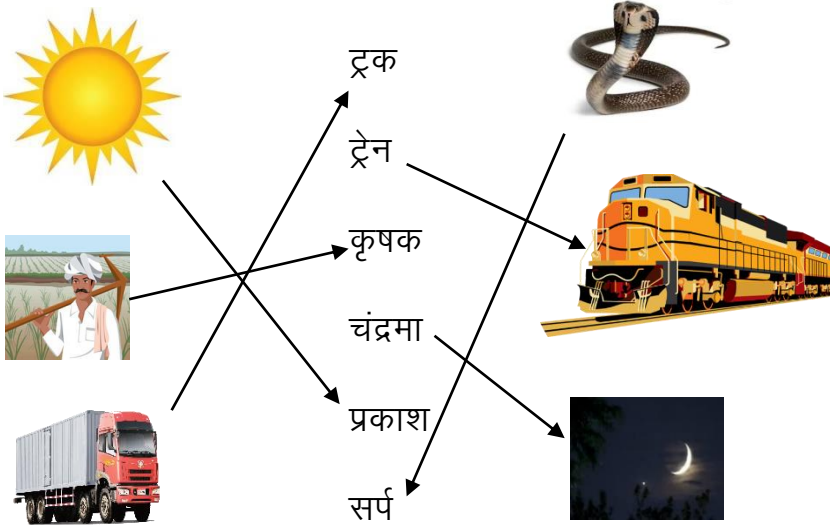
HINDI - I

CLASS – I

पाठ – 9 'ऋ' रेफ और पदेन 'र' की मात्रा

(लिखित)

प्रश्न 1 चित्रों के साथ सही मिलान कीजिए –



प्रश्न 2 अक्षर तथा मात्रा जोड़कर शब्द बनाइए –

प + ृ + थ + क = पृथक

प + ृ + क् + ा + श = प्रकाश

क + ृ + ष + क = कृषक

प + ृ + व + त = पर्वत

स + म् + ृ + ा + ट = सम्राट

ट + ृ + क = ट्रक

पाठ – 10 संयुक्त व्यंजन और संयुक्त अक्षर

प्रश्न 1 उदाहरण देखकर शब्द बनाइए –

च + क् + क् + ी = चक्की

ज् + व + र = ज्वर

क + ब + ड् + ड् + ी = कबड्डी

ध + न् + ा + द् + य = धनाढ्य

प + ट् + ट् + ी = पट्टी

प्रश्न 2 दिए गए संयुक्त व्यंजन से दो-दो शब्द बनाइए –

क्ष – पक्ष

कक्ष

त्र – पत्र

सत्र

ज्ञ — यज्ञ ज्ञान श्र — श्रम श्रेय

प्रश्न 3 संयुक्त अक्षर से दो-दो शब्द बनाइए —

क्क	—	मक्का	चक्का	च्छ	—	मच्छर	अच्छा
त्त	—	पत्ता	गत्ता	व्य	—	व्यय	व्यापार
च्च	—	कच्चा	बच्चा	द्य	—	विद्या	विद्यालय
स्त	—	पस्त	गस्त	त्य	—	त्याग	त्यागी
प्य	—	प्यारा	न्यारा	ज्य	—	ज्यादा	ज्येष्ठ

प्रश्न 4 चित्र के नाम पूरे कीजिए —



त्रिशूल



पहिया



गन्ना



किताब



दवात्



मच्छर

EMMANUEL MISSION SR SEC SCHOOL, BEAWAR
MATHEMATICS
CLASS – I
SELF ASSESSMENT
CHAPTER - 7

M.M - 10


Q.1 What Comes ...

after before between
33 <input type="text"/>	<input type="text"/> 42	22 <input type="text"/> 24
46 <input type="text"/>	<input type="text"/> 19	37 <input type="text"/> 39


Q.2 RING THE NUMBER THAT COMES JUST.....



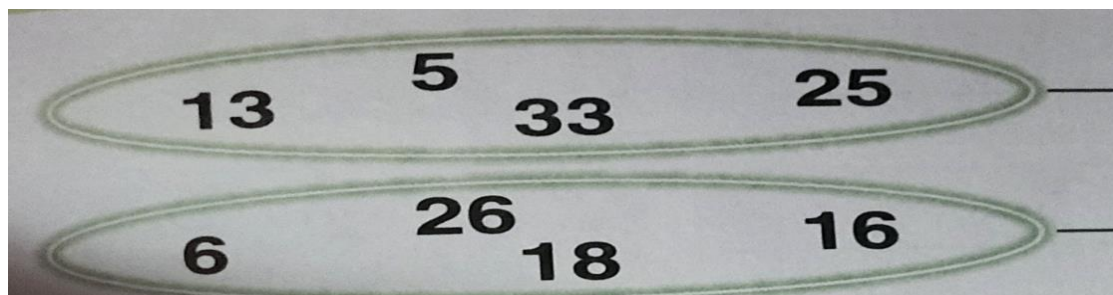
Q.3 RING THE NUMBER THAT COMES.....



Q.4 PUT SIGN > , < OR = IN BOX :



Q. 5 ARRANGE THE NUMBERS IN DESCENDING ORDER :



EMMANUEL MISSION SR SEC SCHOOL, BEAWAR
GENERAL SCIENCE
CLASS – I
Self Assessment Chapter – 4 The Animal World

A. Tick the correct answers.

1. This animal lives on land.

a. Bird b fish. c zebra

2. This animal can fly

a. Rabbit b butterfly c penguin

3. This animal lives in water.

a.Crow b ant. c fish

B. Fill in the blanks.

1.A _____ leaves on trees. (monkey/goat).

2.A _____ eats the flesh of other animals. (goat / tiger)

3. A _____ has wings to fly. (snake/pigeon)

4.A _____. Can live both on land and in water. (frog/rabbit)

C. Match the columns.

1. Fish. a wings

2. Birds. b fins

3. Ducks. C.belly

4.snakes. d.webbed feet

EMMANUEL MISSION SR SEC SCHOOL, BEAWAR
SOCIAL STUDIES
CLASS – I

Assessment : Chapter : 7 & Periodic Test- 2

I. Circle the correct words.




1. Pucca house are made of bricks / straw.
2. We use an umbrella during rainy / winter season.

II. Fill up the missing letters.

1. Y...LL...W
2. F...U...TS






III.

C. A house protects us from

1.  _____
2.  _____
3.  _____

IV

Match the following.

1. A kutcha house	(a) 
2. A pucca house	(b) 
3. Traffic Signals	(c) 
4. Policeman	(d) 
5. Fruits	(e) 

V. Answer the following questions.

1. Why should we eat fruits and vegetables?
2. Where do we have houses with sloping roofs?
3. What is a uniform ?
4. Why do we need a house ?

EMMANUEL MISSION SR SEC SCHOOL, BEAWAR
COMPUTER
CLASS – I

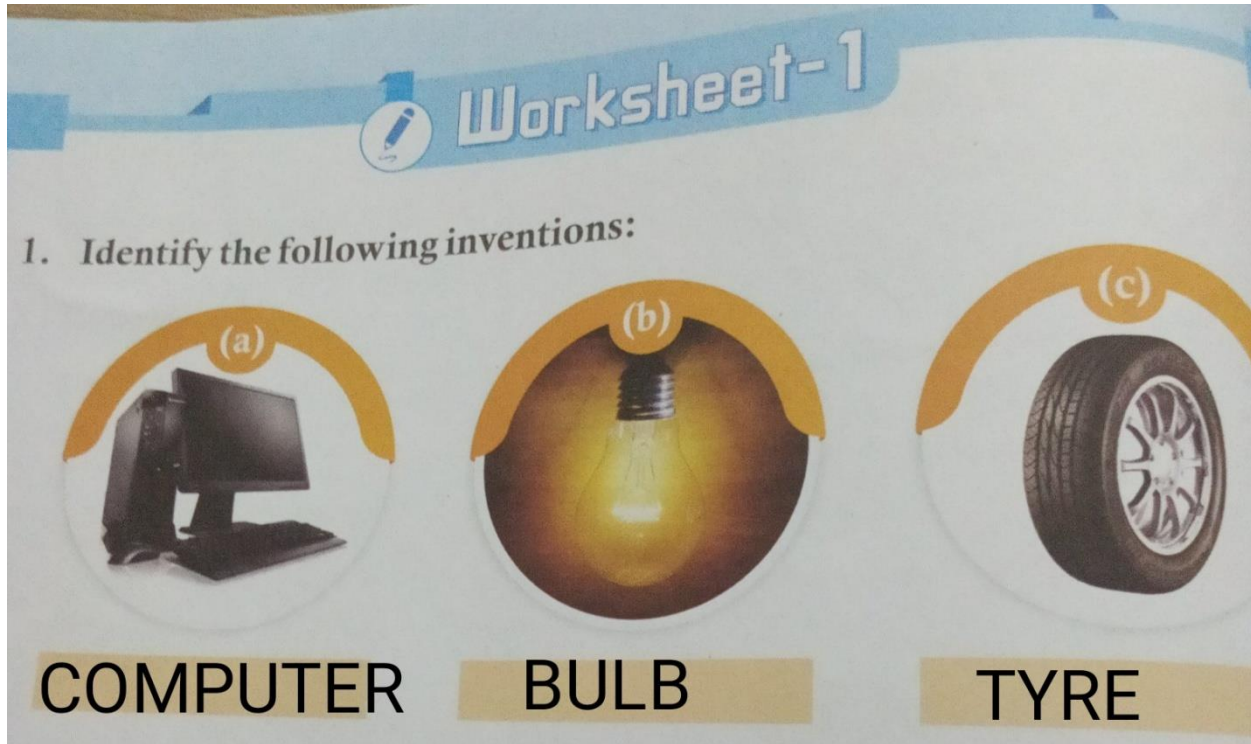
Self Assessment : Evaluation Sheet – 1

Check whether the following statements are True or False. (marks 5)

Check whether the following statements are True or False:	Marks: 5
a. Computer is not a machine.	<input type="text"/>
b. All machines work on electricity.	<input type="text"/>
c. A keyboard has many small buttons called keys.	<input type="text"/>
d. Computer never makes a mistake.	<input type="text"/>
e. Monitor is used to type text.	<input type="text"/>

EMMANUEL MISSION SR SEC SCHOOL, BEAWAR
GENERAL KNOWLEDGE
CLASS – I
Worksheet

1. Identify the following inventions :



2. Write any two activities that make the air dirty :

Ans. : 1. Burning of coal causes air pollution.

2 . Gases release from automobiles causes air pollution.

3 Unscramble the names of the following nocturnal animals :

- a. TAB - BAT
- b. WOL - OWL
- c. OELARDP - LEOPARD
- d. FWLO - WOLF

4 Match the following :

- | | |
|------------------------------------|-------------------------|
| A .He educates us. | (iv) Teacher |
| B. He control traffic on the road. | (iii) Traffic Policeman |
| C. He treats us when we fall sick. | (I) Doctor |

D. He delivers couriers to us. (ii) Delivery boy

5 Tick ☒ the correct option :

1. Alexander Graham Bell was born on March 3, 1847 in _____

- a. Scotland (✓) b. Singapore () c. America ()

2. Our national bird is _____.






- a. Peacock (✓) b. Parrot () c. Swan ()

3. _____ is used in making cooking oil.

- a. Tulip () b. Sunflower (✓) c. Rose ()

4. We should wear _____ while riding a two – Wheeler.

6. Alia wants to eat some fruits with skin. Tick (✓) the fruits that she can eat with skin:

(a) 	<input checked="" type="checkbox"/>	(b) 	<input type="checkbox"/>	(c) 	<input checked="" type="checkbox"/>
(d) 	<input checked="" type="checkbox"/>	(e) 	<input type="checkbox"/>		

a. Watch () b. Cap () c. Helmet (✓)

7 . Write any five qualities that make you the best :

Ans. : 1. Obey your elders.

2. Speak polite

3. Do your work on time

4. Self confidence

5. Good habits